

EXAMINATIONS COUNCIL OF ESWATINI
Junior Certificate Examination

CANDIDATE NAME

CENTRE NUMBER

CANDIDATE NUMBER

GEOGRAPHY

527/01

Paper 1

October/November 2022

1 hours 45 minutes

Candidates answer on the question paper.
No additional materials are required.

READ THESE INSTRUCTIONS FIRST

Write your name, Centre number and candidate number in the spaces provided.

Write in **dark blue** or **black** pen.

You may use a soft pencil for any diagrams, graphs, tables or rough working.

Do not use staples, paper clips, highlighters, glue or correction fluid.

Answer **three** questions. Choose **one** question from each section.

Sketch maps and diagrams should be drawn wherever they serve to illustrate an answer.

The number of marks is given in brackets [] at the end of each question or part question.

| For Examiner's Use | |
|---------------------------|--|
| SECTION A | |
| Question 1 | |
| Question 2 | |
| SECTION B | |
| Question 3 | |
| Question 4 | |
| SECTION C | |
| Question 5 | |
| Question 6 | |
| Total | |

This document consists of **15** printed pages and **1** blank page.

SECTION A – ESWATINI

Answer **one** question from this section

- 1 (a) Study Fig.1 which shows the distribution of minerals in Eswatini.

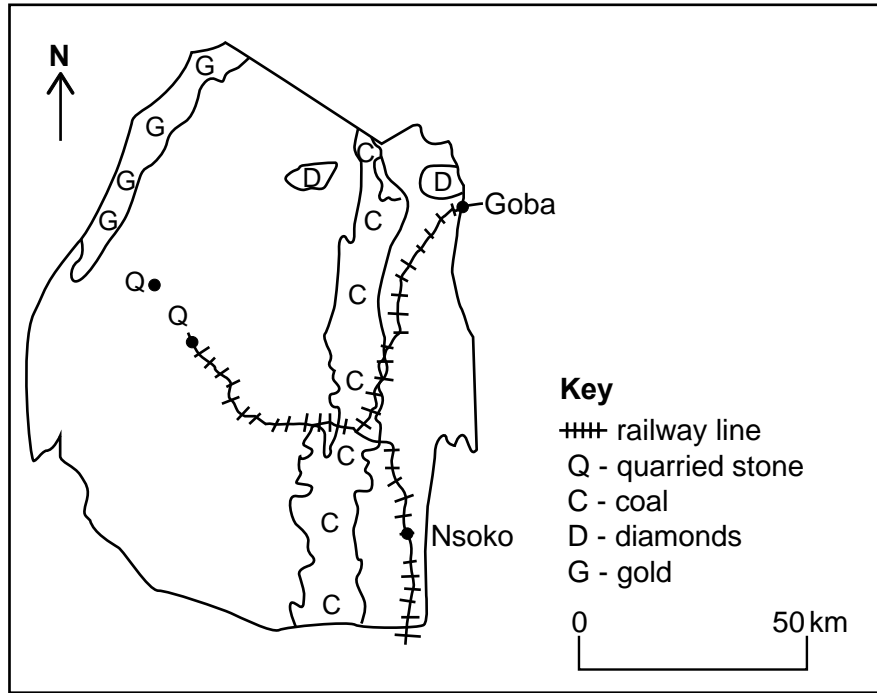


Fig. 1

- (i) Name the mineral that is found in abundance in Eswatini.
 [1]
- (ii) Using Fig. 1, name any **two** minerals that are found in Eswatini.
 1
 2 [2]
- (iii) Explain any **two** positive impacts of coal mining to the people.
 1.....

 2.....

 [4]

- 2 (a) Study Fig. 2 which shows some places where commercial crops are grown in Eswatini.

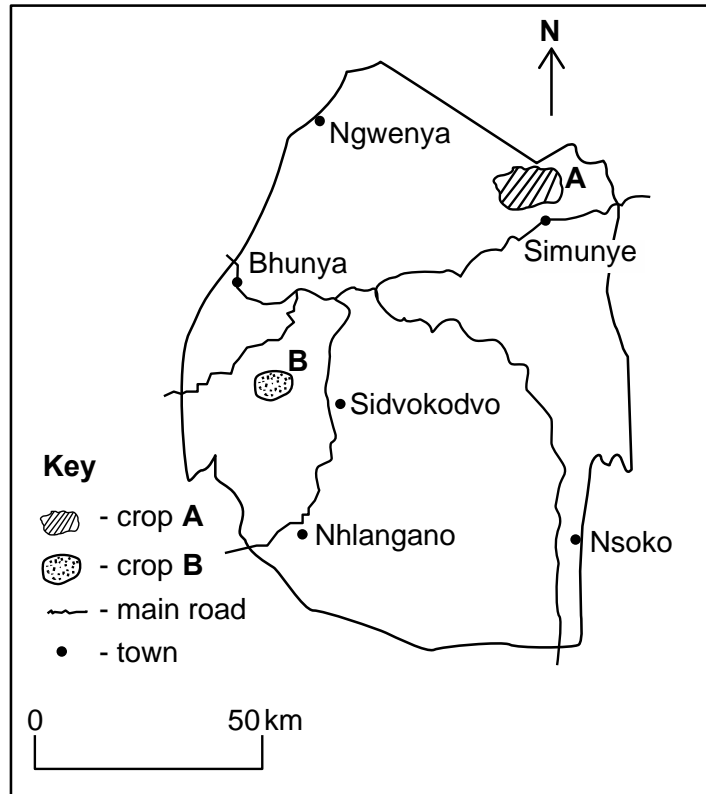


Fig. 2

- (i) Define *commercial farming*.

..... [1]

- (ii) Name the crops grown in areas **A** and **B** for commercial purposes.

A.....

B..... [2]

- (iii) Explain any **two** characteristics of a commercial farm.

1.....

.....

.....

2.....

.....

..... [4]

SECTION B – SADC

Answer **one** question from this section

3 (a) Grapes are grown on a large scale in South Africa.

(i) Name the climatic region that favours the growing of grapes in South Africa.

..... [1]

(ii) Name any **two** uses of grapes.

1.....

2..... [2]

(iii) Explain any **two** problems faced by grape farmers in South Africa.

1.....

.....

.....

2.....

.....

..... [4]

(b) Study Fig. 3 which shows some tourist attraction areas in South Africa.

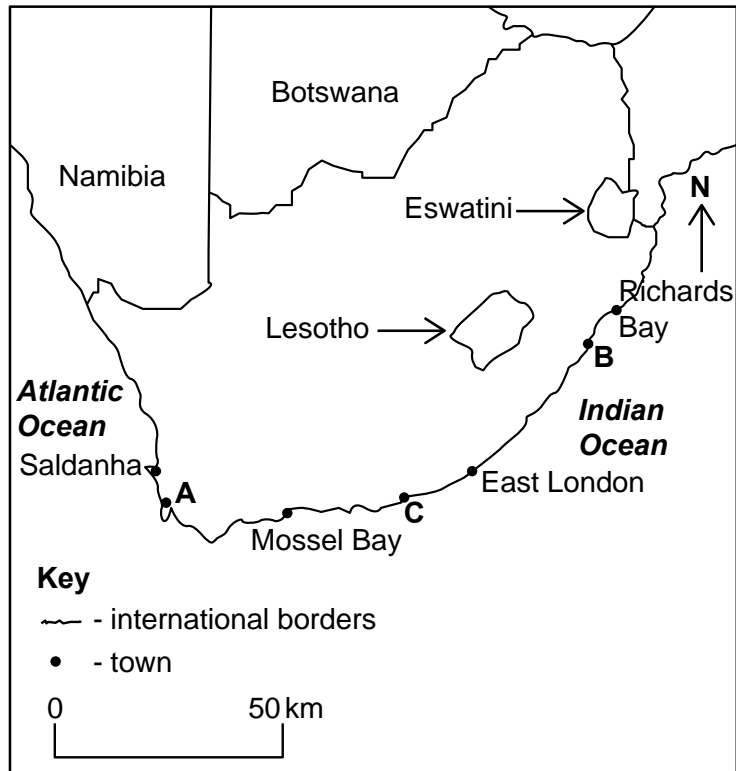


Fig. 3

(i) Name the **three** tourist attraction areas in South Africa labelled as **A**, **B** and **C**.

- A..... [3]
- B.....
- C.....

(ii) Mention any **two** factors promoting coastal tourism.

- 1..... [2]
- 2.....

(iii) State **two** benefits of coastal tourism to South Africa.

- 1..... [2]
- 2.....

(c) Suggest **three** ways of minimising the negative impacts of thermal power stations.

1.....

.....

.....

.....

2.....

.....

.....

.....

3.....

.....

.....

..... [6]

[Total: 20 marks]

4 (a) Lesotho, like Eswatini, is a landlocked country.

(i) Name the country that shares borders with Lesotho.

..... [1]

(ii) Give the names of any **two** physiographic regions found in Lesotho.

1.....

2..... [2]

(iii) Explain any **two** limitations of the relief of Lesotho to the economy.

1.....

.....

2.....

..... [4]

(b) Study Fig. 4 which shows rivers and swamps in Botswana.

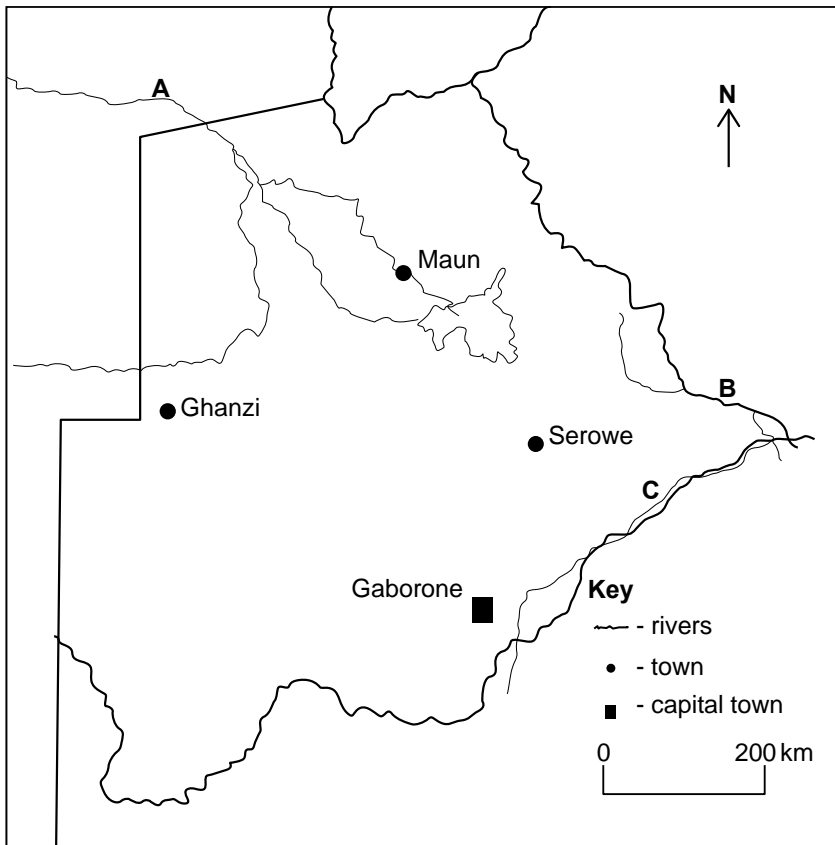


Fig. 4

(i) Name the rivers marked **A**, **B** and **C**.

A.....

B.....

C..... [3]

(ii) Name the **two** systems of commercial pastoral farming practised in Botswana.

1.....

2..... [2]

(iii) State **two** ways by which the government assists cattle farmers in Botswana.

1.....

.....

.....

2.....

.....

..... [2]

(c) Suggest **three** measures taken to conserve water in Namibia.

1

.....

.....

.....

2

.....

.....

.....

3

.....

.....

..... [6]

[Total: 20 marks]

SECTION C - COUNTRIES OUTSIDE AFRICA

Answer **one** question from this section

5 (a) Study Fig. 5 which shows the islands that make up Japan.

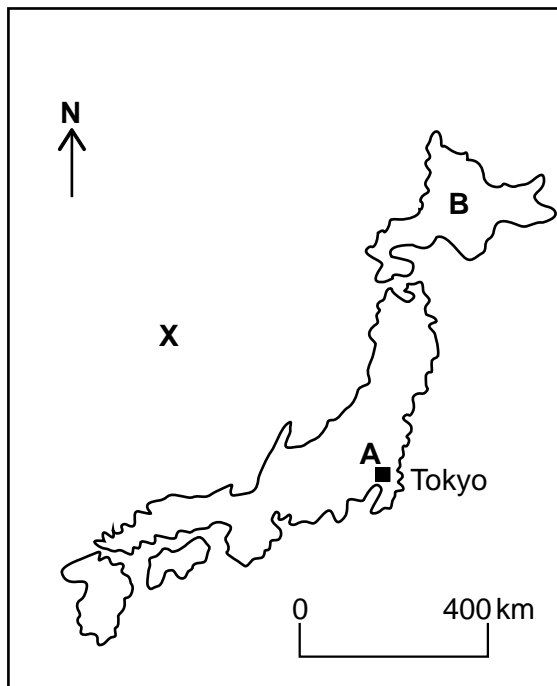


Fig.5

(i) Name the sea marked **X** on Fig. 5.
 [1]

(ii) Give the names of the islands marked **A** and **B**.
A.....
B..... [2]

(iii) Explain any **two** government policies that have promoted the development of industries in Japan.
1.....

2.....

 [4]

(b) (i) Name any **three** provinces found along the coast of the Netherlands.

- 1..... [3]
- 2.....
- 3..... [3]

(ii) Name the **two** countries that are neighbours to the Netherlands.

- 1..... [2]
- 2..... [2]

(iii) State any **two** uses of polder land.

- 1..... [2]
- 2..... [2]

(c) Suggest **three** characteristics of agriculture in Japan.

- 1..... [6]
-
-
- 2.....
-
-
- 3.....
-
-

[Total: 20 marks]

6 Study Fig. 6 which shows the map of Brazil.

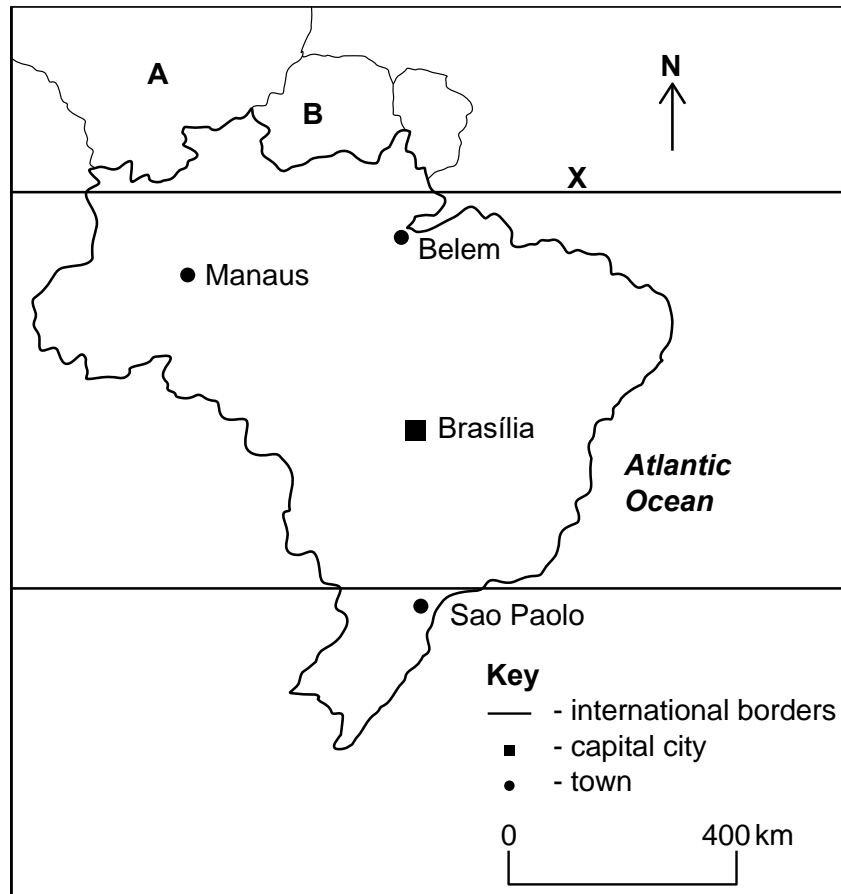


Fig. 6

(a) (i) Name the line of latitude marked X.

..... [1]

(ii) Name the **two** neighbouring countries marked A and B.

1.....

2..... [2]

(iii) Explain any **two** reasons why the tropical rainforests are exploited.

1.....

.....

.....

2.....

.....

..... [4]

BLANK PAGE

Permission to reproduce items where third-party owned material protected by copyright is included has been sought and cleared where possible. Every reasonable effort has been made by the publisher (ECESWA) to trace copyright holders, but if any items requiring clearance have unwittingly been included, the publisher will be pleased to make amends at the earliest possible opportunity.